

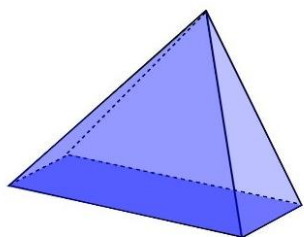
Test – mercredi 4 octobre 2023

Compétences travaillées	Niveau de maîtrise	Commentaires
Représenter : (Re4) Je sais reconnaître les éléments en géométrie 3D	<input type="text"/>	

Maîtrise insuffisant - Maîtrise fragile - Maîtrise satisfaisante - Très bonne maîtrise - Non évalué

Exercice

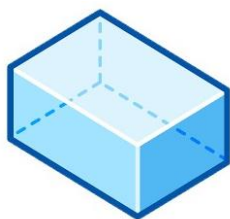
1. Entourer en bleu les solides.
2. Entourer en noir les figures.
3. Donner le nom des figures et solides suivants :



.....

.....


.....



.....

.....


.....



.....

.....

.....



.....

.....

.....



.....

.....


.....



.....

.....

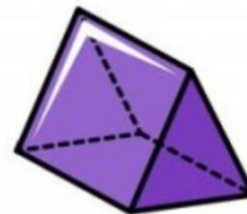
.....



.....

.....


.....



.....

.....

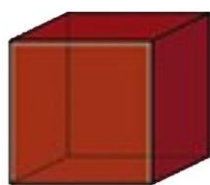
.....



.....

.....

.....



.....

.....

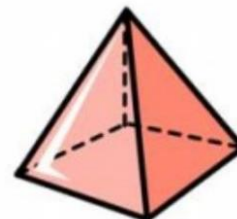
.....



.....

.....

.....



.....

.....

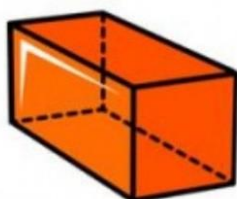
.....



.....

.....

.....



.....

.....

.....



.....

.....

.....



.....

.....

.....

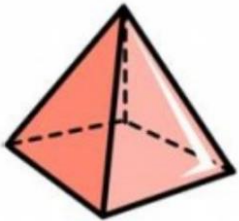

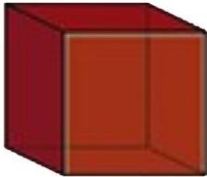



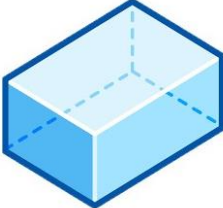
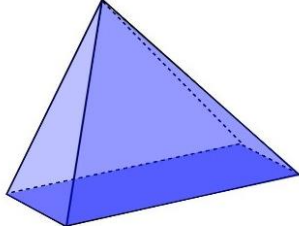
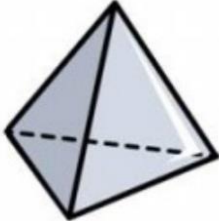

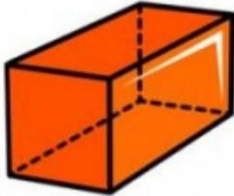

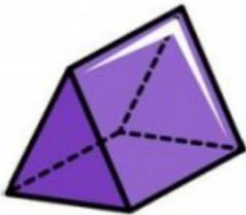



Test – mercredi 4 octobre 2023

Compétences travaillées	Niveau de maîtrise	Commentaires
Représenter : (Re4) Je sais reconnaître les éléments en géométrie 3D	<input type="text"/>	

Maîtrise insuffisant - Maîtrise fragile - Maître satisfaisante - Très bonne maîtrise - Non évalué

Exercice

1. Entourer en bleu les solides.
2. Entourer en noir les figures.
3. Donner le nom des figures et solides suivants :

			
.....
			
.....
			
.....
			
.....

